

Centre Number						Candidate Number				
Surname										
Other Names										
Candidate Signature										

For Examiner's Use	
Examiner's Initials	
Question	Mark
1	
2	
3	
4	
5	
6	
7	
8	
TOTAL	



General Certificate of Education  
Advanced Level Examination  
June 2014

# Mathematics

# MM2B

## Unit Mechanics 2B

Monday 23 June 2014 9.00 am to 10.30 am

**For this paper you must have:**

- the blue AQA booklet of formulae and statistical tables.
- You may use a graphics calculator.

### Time allowed

- 1 hour 30 minutes

### Instructions

- Use black ink or black ball-point pen. Pencil should only be used for drawing.
- Fill in the boxes at the top of this page.
- Answer **all** questions.
- Write the question part reference (eg (a), (b)(i) etc) in the left-hand margin.
- You must answer each question in the space provided for that question. If you require extra space, use an AQA supplementary answer book; do **not** use the space provided for a different question.
- Do not write outside the box around each page.
- Show all necessary working; otherwise marks for method may be lost.
- Do all rough work in this book. Cross through any work that you do not want to be marked.
- The **final** answer to questions requiring the use of calculators should be given to three significant figures, unless stated otherwise.
- Take  $g = 9.8 \text{ m s}^{-2}$ , unless stated otherwise.

### Information

- The marks for questions are shown in brackets.
- The maximum mark for this paper is 75.

### Advice

- Unless stated otherwise, you may quote formulae, without proof, from the booklet.
- You do not necessarily need to use all the space provided.



J U N 1 4 M M 2 B 0 1

Answer **all** questions.

Answer each question in the space provided for that question.

- 1** An eagle has caught a salmon of mass 3 kg to take to its nest. When the eagle is flying with speed  $8 \text{ m s}^{-1}$ , it drops the salmon. The salmon falls a vertical distance of 13 metres back into the sea.
- The salmon is to be modelled as a particle. The salmon's weight is the only force that acts on it as it falls to the sea.
- (a) Calculate the kinetic energy of the salmon when it is dropped by the eagle. **[2 marks]**
- (b) Calculate the potential energy lost by the salmon as it falls to the sea. **[2 marks]**
- (c) (i) Find the kinetic energy of the salmon when it reaches the sea. **[2 marks]**
- (ii) Hence find the speed of the salmon when it reaches the sea. **[2 marks]**

QUESTION  
PART  
REFERENCE

**Answer space for question 1**



QUESTION  
PART  
REFERENCE

**Answer space for question 1**

A large rectangular area with horizontal dotted lines for writing the answer to question 1.



**Turn over** ►



QUESTION  
PART  
REFERENCE

**Answer space for question 2**

A large rectangular area with horizontal dotted lines for writing an answer.



**Turn over** ►



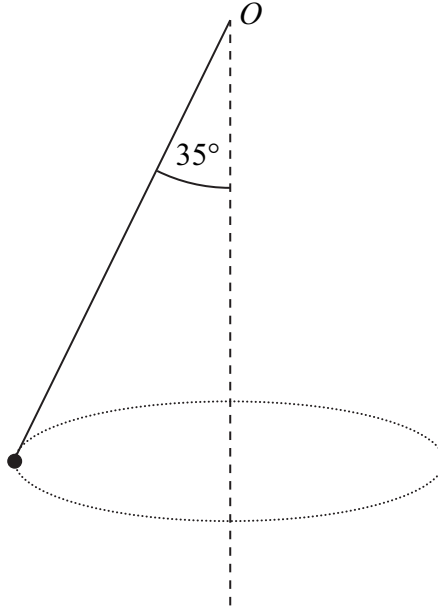
QUESTION  
PART  
REFERENCE

**Answer space for question 3**

A large rectangular area with horizontal dotted lines for writing an answer.



- 4 A particle, of mass  $0.8 \text{ kg}$ , is attached to one end of a light inextensible string. The other end of the string is attached to the fixed point  $O$ . The particle is set in motion, so that it moves in a horizontal circle at constant speed, with the string at an angle of  $35^\circ$  to the vertical. The centre of this circle is vertically below  $O$ , as shown in the diagram.



The particle moves in a horizontal circle and completes 20 revolutions each minute.

- (a) Find the angular speed of the particle in radians per second. [2 marks]
- (b) Find the tension in the string. [3 marks]
- (c) Find the radius of the horizontal circle. [4 marks]

QUESTION  
PART  
REFERENCE

Answer space for question 4





QUESTION  
PART  
REFERENCE

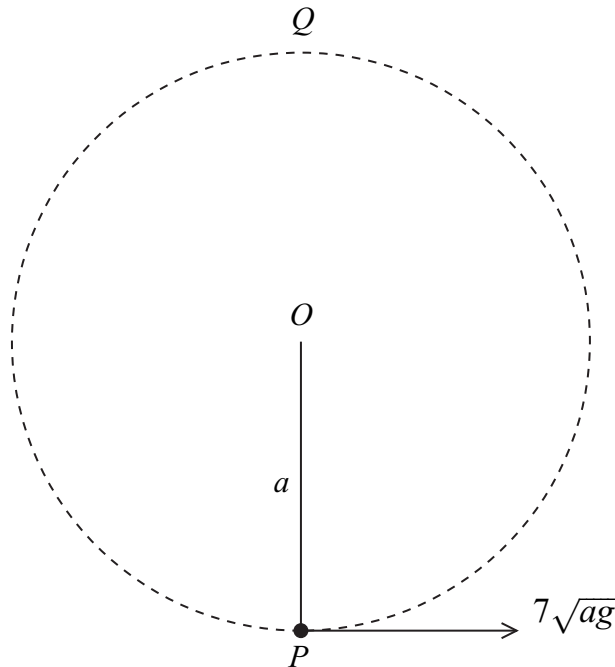
**Answer space for question 4**

A large rectangular area with horizontal dotted lines for writing an answer.



**Turn over** ►

- 5 A light inextensible string, of length  $a$ , has one end attached to a fixed point  $O$ . A particle, of mass  $m$ , is attached to the other end of the string. The particle is moving in a vertical circle with centre  $O$ . The point  $Q$  is the highest point of the particle's path. When the particle is at  $P$ , vertically below  $O$ , the string is taut and the particle is moving with speed  $7\sqrt{ag}$ , as shown in the diagram.



- (a) Find, in terms of  $g$  and  $a$ , the speed of the particle at the point  $Q$ . [4 marks]
- (b) Find, in terms of  $g$  and  $m$ , the tension in the string when the particle is at  $Q$ . [3 marks]

QUESTION  
PART  
REFERENCE

Answer space for question 5



QUESTION  
PART  
REFERENCE

**Answer space for question 5**

A large rectangular area with horizontal dotted lines for writing an answer.

**Turn over ►**





QUESTION  
PART  
REFERENCE

**Answer space for question 6**

A large rectangular area with horizontal dotted lines for writing an answer.

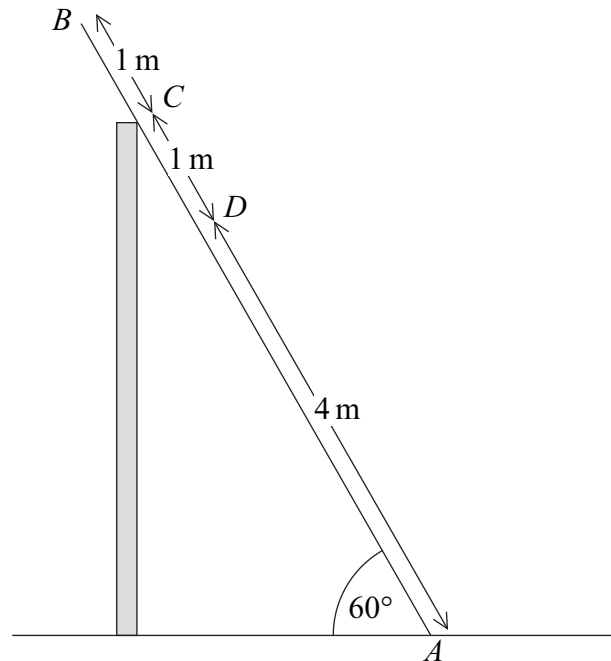


7

A uniform ladder  $AB$ , of length 6 metres and mass 22 kg, rests with its foot,  $A$ , on rough horizontal ground. The ladder rests against the top of a smooth vertical wall at the point  $C$ , where the length  $AC$  is 5 metres. The vertical plane containing the ladder is perpendicular to the wall, and the angle between the ladder and the ground is  $60^\circ$ . A man, of mass 88 kg, is standing on the ladder.

The man may be modelled as a particle at the point  $D$ , where the length of  $AD$  is 4 metres.

The ladder is on the point of slipping.



- (a) Draw a diagram to show the forces acting on the ladder.

[2 marks]

- (b) Find the coefficient of friction between the ladder and the horizontal ground.

[6 marks]

QUESTION  
PART  
REFERENCE

Answer space for question 7



QUESTION  
PART  
REFERENCE

**Answer space for question 7**

A large rectangular area with horizontal dotted lines for writing an answer.

**Turn over** ►







QUESTION  
PART  
REFERENCE

**Answer space for question 8**

A large rectangular area with horizontal dotted lines for writing an answer.



QUESTION  
PART  
REFERENCE

**Answer space for question 8**

A large rectangular area with horizontal dotted lines for writing an answer.



QUESTION  
PART  
REFERENCE

**Answer space for question 8**

A large rectangular area with horizontal dotted lines for writing an answer.

**END OF QUESTIONS**



**There are no questions printed on this page**

**DO NOT WRITE ON THIS PAGE  
ANSWER IN THE SPACES PROVIDED**

